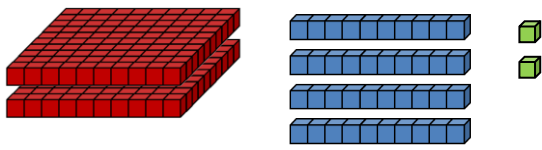
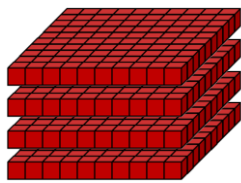


Quel est ce nombre ?



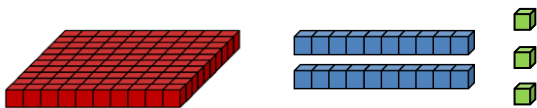
$$200 + 40 + 2 = 242$$

Quel est ce nombre ?



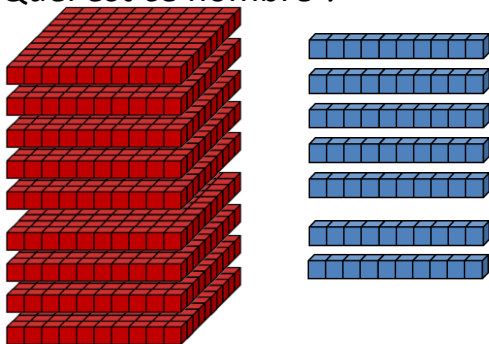
$$400 + 0 + 0 = 400$$

Quel est ce nombre ?



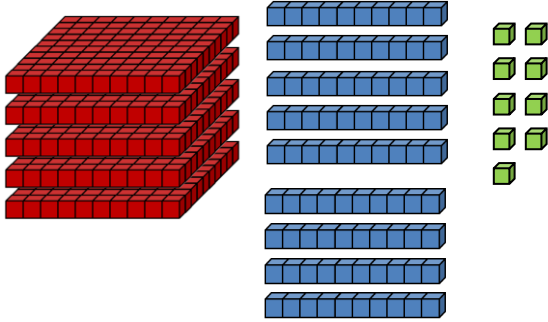
$$100 + 20 + 3 = 123$$

Quel est ce nombre ?



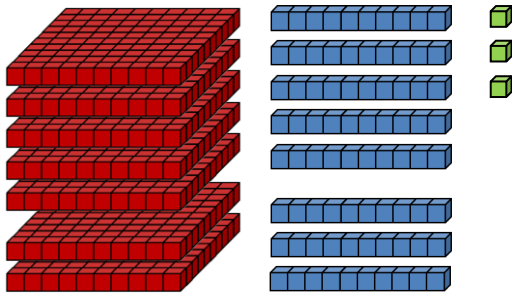
$$900 + 70 + 0 = 970$$

Quel est ce nombre ?



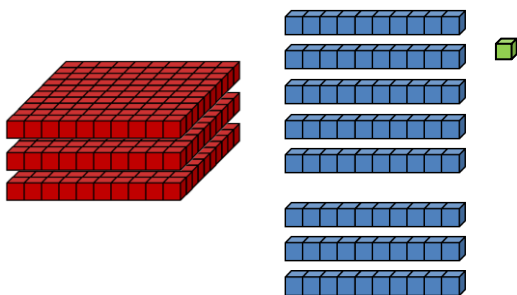
$$500 + 90 + 9 = 599$$

Quel est ce nombre ?



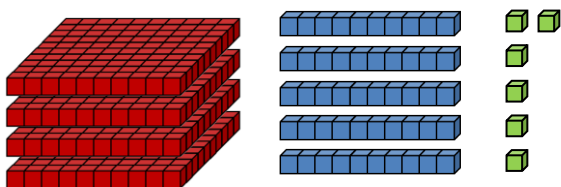
$$700 + 80 + 3 = 783$$

Quel est ce nombre ?



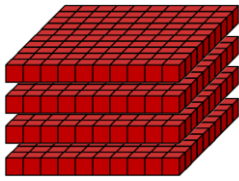
$$300 + 80 + 1 = 381$$

Quel est ce nombre ?




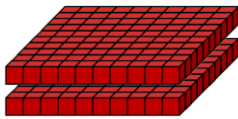
$$400 + 50 + 6 = 456$$

Quel est ce nombre ?



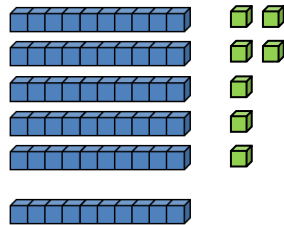
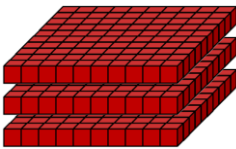
$$400 + 0 + 4 = 404$$

Quel est ce nombre ?



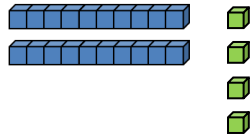

$$200 + 70 + 4 = 274$$

Quel est ce nombre ?



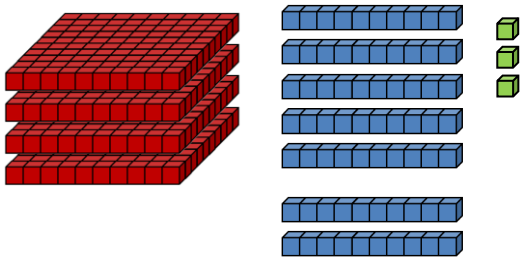
$$300 + 60 + 7 = 367$$

Quel est ce nombre ?



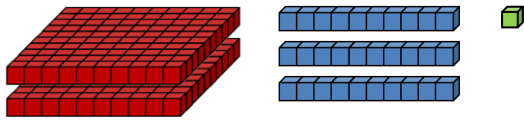
$$800 + 20 + 4 = 824$$

Quel est ce nombre ?



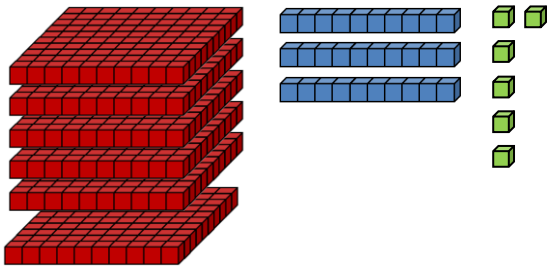
$$400 + 70 + 3 = 473$$

Quel est ce nombre ?



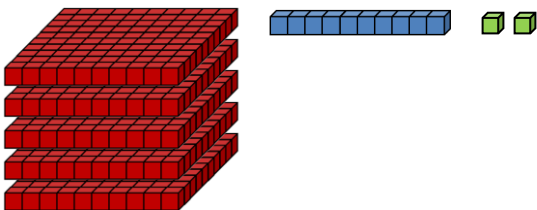
$$200 + 30 + 1 = 231$$

Quel est ce nombre ?



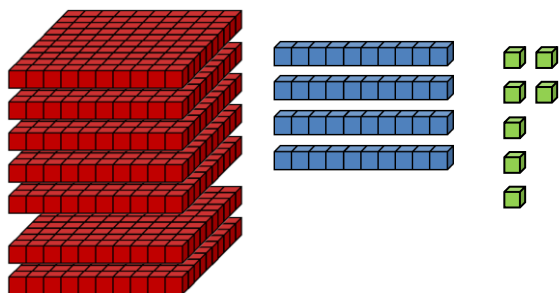
$$600 + 30 + 6 = 636$$

Quel est ce nombre ?



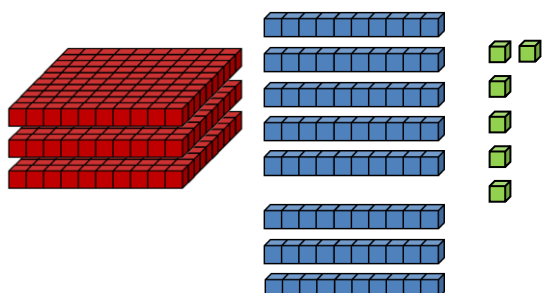
$$500 + 10 + 2 = 512$$

Quel est ce nombre ?



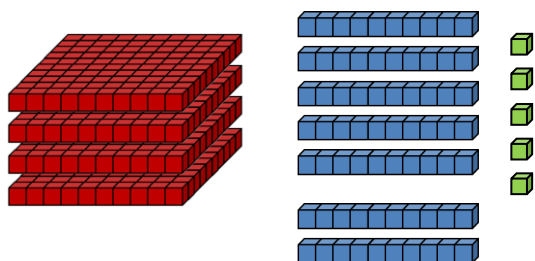
$$700 + 40 + 7 = 747$$

Quel est ce nombre ?



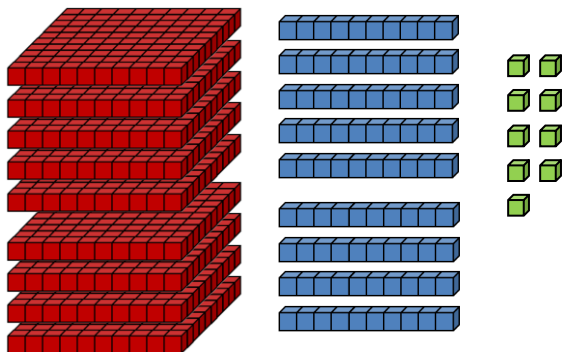
$$300 + 80 + 6 = 386$$

Quel est ce nombre ?



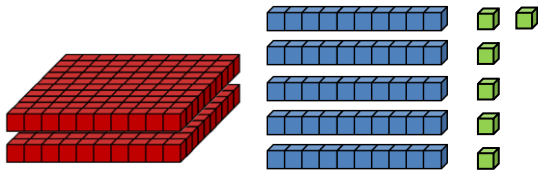
$$400 + 70 + 5 = 475$$

Quel est ce nombre ?



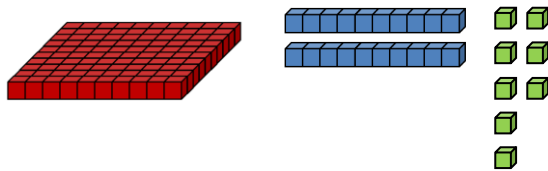
$$900 + 90 + 9 = 999$$

Quel est ce nombre ?



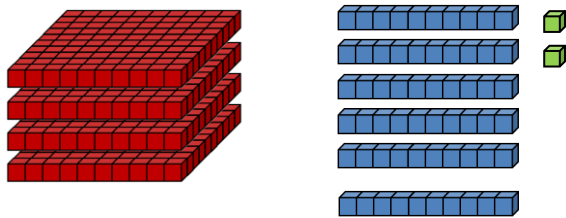
$$200 + 50 + 6 = 256$$

Quel est ce nombre ?



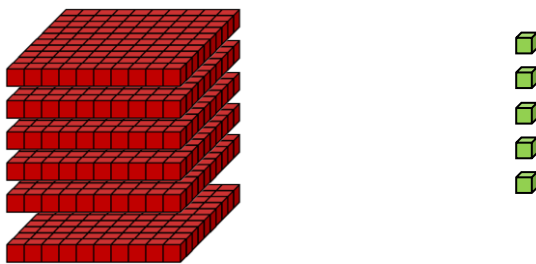
$$100 + 20 + 8 = 128$$

Quel est ce nombre ?

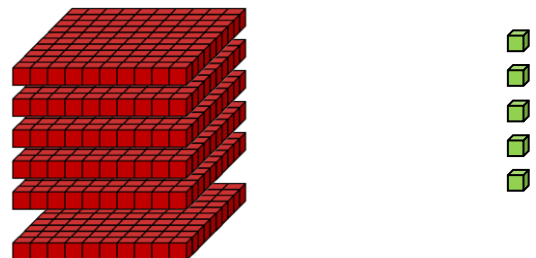


$$400 + 60 + 2 = 462$$

Quel est ce nombre ?

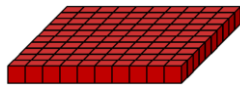


$$600 + 0 + 5 = 605$$



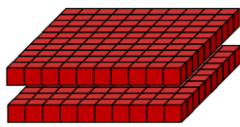
$$600 + 0 + 5 = 605$$

Quel est ce nombre ?



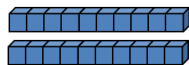
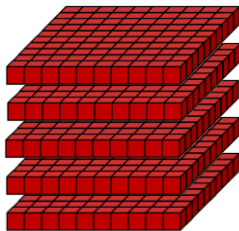
$$100 + 0 + 9 = 109$$

Quel est ce nombre ?




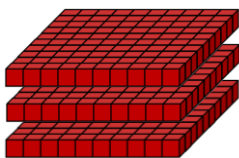
$$200 + 10 + 7 = 217$$

Quel est ce nombre ?



$$500 + 20 + 8 = 528$$

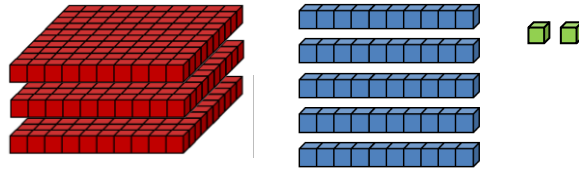
Quel est ce nombre ?



$$300 + 60 + 5 = 365$$

format WORD

# Composer des nombres

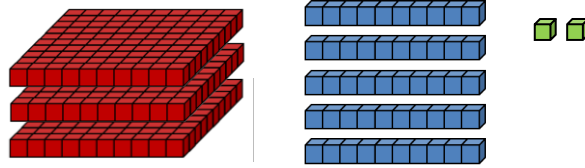


$$C + D + U$$

# Composer des nombres

$$C + D + U$$

# Composer des nombres




$$C + D + U$$

Composer des nombres

Composer des nombres

# Composer des nombres

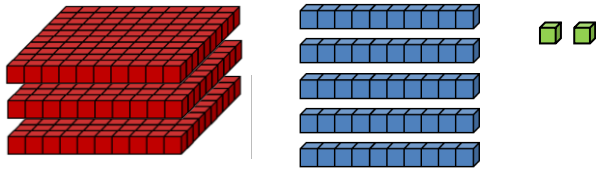
$$C + D + U$$





format PDF

# Composer des nombres



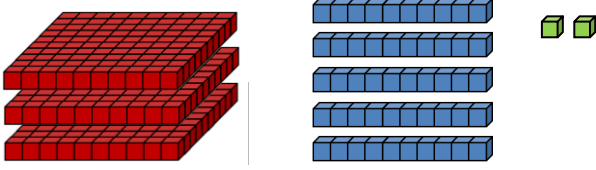
$C + D + U$

# Composer des nombres

$C + D + U$

Composer des nombres

# Composer des nombres



$C + D + U$

Composer des nombres

# Composer des nombres

$C + D + U$

